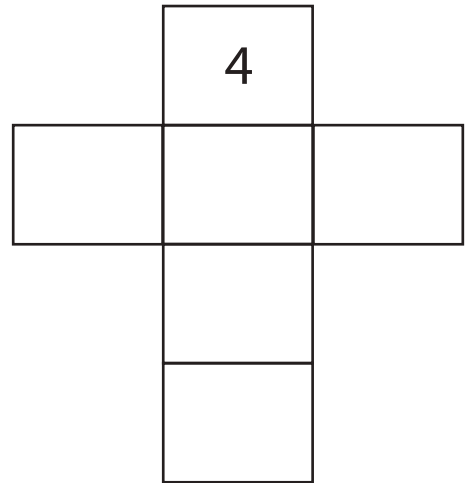



1) Write the numbers 2, 3, 5, 6, and 7 in the correct place so that each line of the cross and up to 15.

2 3 5 6 7
Total must be 15

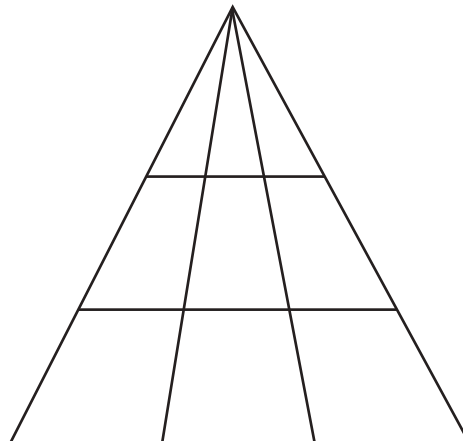


2) Write the numbers 2, 3, 4, 5, 6 and 7 in the squares so that each line of cross adds up to 17.

2 3 4 5 6 7
Total must be 17



How many Triangles in this shape?



Answer is 18 triangles